



VICTORY STEP EDUCATION SERVICES  
PRE – REGISTRATION SUPER CHECK THREE  
2023

SOCIAL STUDIES WITH RELIGIOUS EDUCATION

*Time Allowed: 2 hours 15 minutes*

Random No:						Personal No:		

Candidate's Name: .....

Candidate's signature: .....

District ID No: 

--	--	--	--

School Name: .....

Read the following instructions carefully :

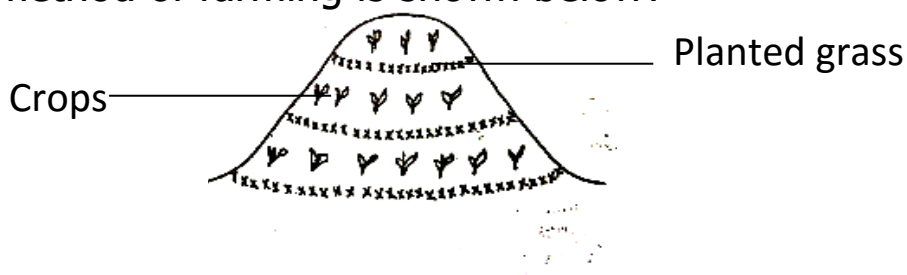
1. Do not forget to write your **school** or **district** on the paper
2. This paper has two sections: **A** and **B**.  
Section **A** has **40** questions and section **B** has **15** questions.
3. Answer **all** questions. All answers to both Sections **A** and **B** must be written in the spaces provided.
4. All answers must be written using a **blue** Or **black** ball point pen or ink. Any work Written in pencil will not be marked.
5. Unnecessary changes in your work and handwriting that cannot be read easily may lead to loss of marks.
6. Do not fill anything in the table indicated  
**"FOR EXAMINER'S USE ONLY"**

FOR EXAMINER'S USE ONLY		
QN. NO.	MARKS	EXR'S NO.
1 -10		
11 - 20		
21 - 30		
31 - 40		
41 - 43		
44 - 46		
47 - 49		
50 - 52		
53 - 55		
TOTAL		

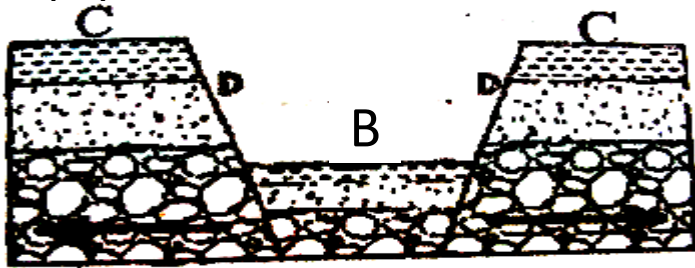
## SECTION A: 40 MARKS

Questions from 1 to 40 all carry one mark each

1. Give a reason for Mombasa to be hotter than Kampala.  
.....
2. Why do visitors like to visit mountainous areas in Uganda?  
.....
3. Give any one way in which lakes and rivers influence climate of an area.  
.....
4. Give any one way in which order is kept in your school.  
.....
5. Why is it not proper to harvest crops in wet season?  
.....
6. State any one reason for which the Uganda National flag is flown half – mast  
.....
7. What role did Borup play in the development of Uganda’s agriculture?  
.....
8. Which problem is Joseph likely to find while using a map without a scale?  
.....
9. How is a ship able to find the right direction across the ocean?  
.....
10. Why does the government discourage people to settle in swamps.  
.....
11. Give any one way in which the construction of the Uganda railway contributed to the economic development of Uganda.  
.....
12. State any one advantage of getting a leader through inheritance.  
.....
13. Which element of weather is measured using a barometer?  
.....
14. What was the bolas used for during stone age period?  
.....
15. Name any one European explorer who made two journeys to East Africa.  
.....
16. Which method of farming is shown below?



17. State the importance of the planted grass in the method shown above.  
.....
18. Name the continent which is not suitable for human settlement.  
.....
19. Name any one river that flows out of lake Kyoga.  
.....
20. Why are pipelines the best means of transporting water to homes?  
.....
21. Name the line of latitude where equinox is experienced .  
.....
22. Which land locked country is found in the horn of Africa?  
.....
23. Which physical feature is formed in the area marked **B**?



- .....
24. What term is used to mean the slopes marked **D** on the diagram above?  
.....
25. What does "**political independence of a country**" mean?  
.....  
.....
26. Give any one way in which people acquire land.  
.....
27. How did the Bachwezi promote mining in Uganda?  
.....
28. State any one economic benefit of game parks in Uganda.  
.....
29. What type of tax is paid on locally manufactured goods?  
.....
30. Why is recycling important in waste management?  
.....
31. Which plantation crop is grown in Kericho in Kenya?  
.....
32. Why are Ugandans below 18 years not allowed to participate in national elections?  
.....
33. Why does the lee – ward side of the mountain receive very little rain?  
.....
34. Give the major cash crop grown in west Nile.

.....  
35. State any one way in which the Judiciary promotes peace in a country.  
.....

For each of the questions **36** to **40** , answer **EITHER** the Christian **OR** the Islamic questions but not both.

36. **EITHER:** Why is the Bible called a holy book?  
.....

**OR:** Why is the Quran called a holy book?  
.....

37. **EITHER:** What was the work of Matthew before he became an apostle?  
.....

**OR:** What was the work of Khadijah the wife of Prophet Muhammad?  
.....

38. **EITHER:** Which sacrament joins a man and a woman as a husband and a wife?  
.....

**OR:** Which pillar of Islam brings the rich and the poor together?  
.....

39. **EITHER:** Name any one of God’s promises to faithful Christians.  
.....

**OR:** Name any one of Allah’s promises to faithful Muslims.  
.....

40. **EITHER:** Why do Christians visit Namugongo on 3<sup>rd</sup> June every year?  
.....

**OR:** Why do Muslims visit Mecca every year?  
.....

**SECTION B:(60MARKS).**

All questions in this section carry four marks each.

41a) Give two ways through which the discovery of fire improved early man’s life.  
.....

i) .....

ii) .....

b) Write down any two sources of Oral history.  
.....

i) .....

ii) .....

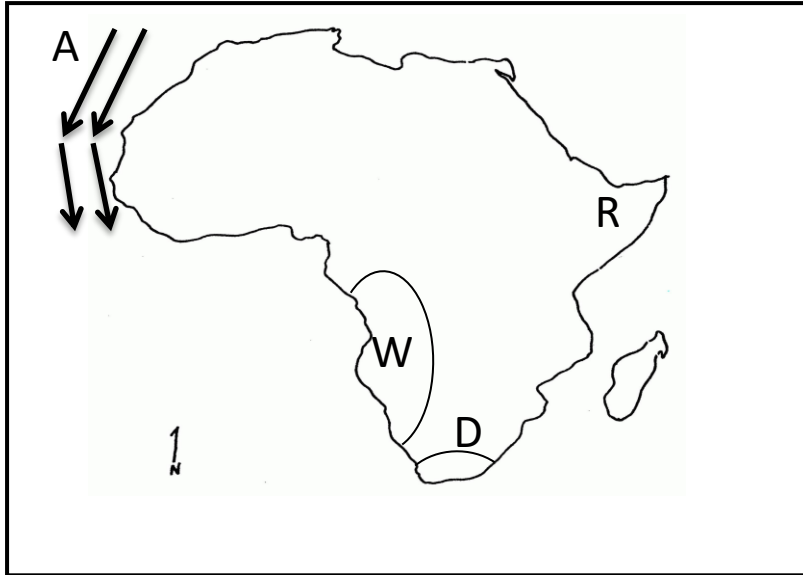
42a) What was the traditional occupation of the Nilotes?  
.....

b) Why didn’t the Nilotes form kingdoms?  
.....

c) How are the Karimajong of Uganda similar to the Turkanah of Kenya in terms of economic activities?

d) Write down one effect of Nilotes movement in East Africa.

43. Study the sketch map of Africa and use it to answer questions that follow.



a) Mention any one way in which vegetation zone marked D is important to the people in this area.

b) Mention any one problem faced by country marked R.

c) Name the ocean current marked A.

d) State any one factor which influence the vegetation of in the area marked W.

44a) State any two problems experienced by the people who live near rift valley.

i) .....

ii) .....

b) Why do most people settle along the slopes of the mountain?

i) .....

c) Name the most swampy lake in Uganda.

45a) What is the importance of the veterinary doctor to a cattle keeper?

b) State any two factors that favour dairy farming in Kenya highlands.

i) .....

ii) .....

c) State any one way in which dairy farming can be improved in Uganda.

46a) Which river drains the largest part of the Democratic Republic of Congo?

b) Give any two reasons why the river you have named in 46(a) above carries the largest water.

i) .....

ii) .....

c) Name the ocean into which the river named in 46(a) above pours its water

47a) Give any two economic advantages of industrial growth in an area.

i) .....

ii) .....

b) State any two reasons why it is necessary to build industries in rural areas

i) .....

ii) .....

48a) Give any one reason why the British East African Company failed to rule Uganda.

b) Give three ways in which the signing of the 1900 Buganda agreement affected Buganda.

i) .....

ii) .....

iii) .....

49a) Complete the table below by either filling in the raw materials used to produce the product given or the product made from the raw materials given.

Raw material	Product
Tobacco	.....
.....	Cement
Maize	.....
.....	Charcoal

50a) Name the lake where the district of Kalangala is found.

.....

b) State any three reasons why water transport on some parts of River Nile is not possible.

- i) .....
- ii) .....
- iii) .....

For each of the questions from 51 – 55 , answer **EITHER** the Christian **OR** the Islamic questions but not both. No mark will be awarded to a candidate who will attempt both alternatives in a particular number.

51. **EITHER:** Match the days in list **A** with the events in list **B**.

<b>A</b>	<b>B</b>
Ash Wednesday	Jesus Christ ascended to heaven
Holy Thursday	Christians begin fasting
Ascension day	Disciples received the Holy spirit
Pentecost day	Jesus Christ instituted the holy Eucharist.

- i) Ash Wednesday .....
- ii) Holy Thursday .....
- iii) Ascension day .....
- iv) Pentecost day .....

**OR:** Match the events in list **A** with those in list **B**.

<b>A</b>	<b>B</b>
Idd – adhuha	Holy journey to Mecca
Idd – elfitri	Prophet Muhammad’s journey from Mecca to Medina
Hijjah	Festival that marks the end of Ramadhan
Hijrah	Festival to remember prophet Ibrahim’s sacrifice to Allah

- i) Idd – adhuha .....
- ii) Idd – elfitri .....
- iii) Hijjah .....
- iv) Hijrah .....

52.**EITHER:** In the story of the “**lost sheep**” Jesus teaches that if one sheep out of one hundred is lost , the shepherd will leave the ninety – nine and look for the lost one

a) Who is the shepherd in this parable?

.....

- b) Who are the sheep?  
.....
- c) Whom did Jesus refer to as the lost sheep ?  
.....
- d) Why are the ninety – sheep not as important as the lost one according to Jesus?  
.....

**OR:** What is Zakat?  
.....

- a) Give three groups who are meant to receive Zakat.  
i) .....  
ii) .....  
iii) .....

53. **EITHER:**What helped Jesus Christ to be successful when he was on earth?  
i) .....  
ii) .....  
b) Give any two factors that lead people to a successful life today.  
i) .....  
iii) .....

54. **FOR BOTH:** Name any two voluntary organizations that offer free services in Uganda.  
i) .....  
ii) .....  
b) Mention any two ways in which the organizations you have mentioned above help people.  
i) .....  
ii) .....

55. **EITHER:** Give any two reasons why Christians pray as soon as they wake up in the morning.  
i) .....  
ii) .....  
b) Give any two symbols of a Christianity family.  
i) .....  
ii) .....

- OR:** What is Tayammum? .....
- b) Give any one condition under which Tayammum is done  
.....
- c) Give any two things that can be used in Tayammum.  
i) .....  
ii) .....